




Mercury

* Name _____

Week 13

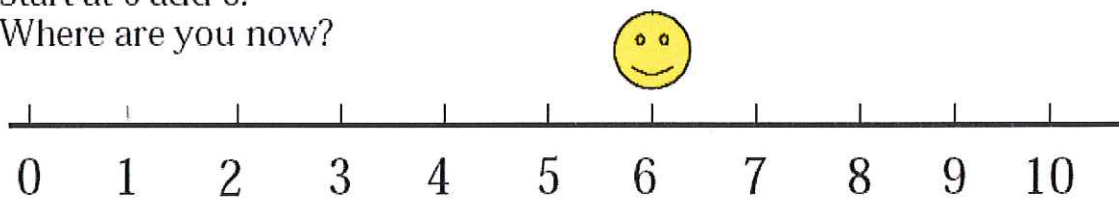
***1.

Show three ways to divide a rectangular cake in two-equal pieces.



*2.

Start at 6 add 3.
Where are you now?



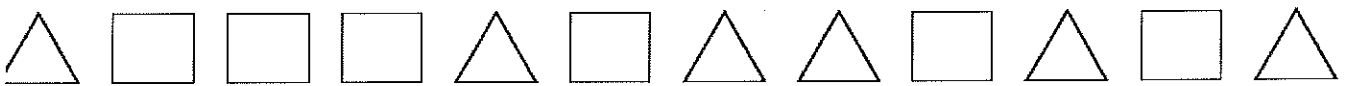
A. 6


B. 9

C. 10



**** 3.**

Are there more triangles, more squares, or are there an equal number of triangles and squares?



A. more 

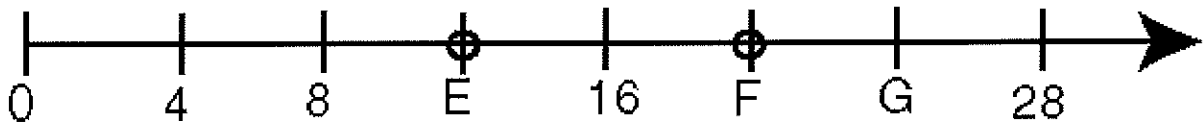
B. more 

C. equal  

***** 4.**

What number does letter F best represent on the number line

below? _____



****** 5.**

Find the missing number for the input-output chart. Write the rule.

Input	Output
2	0
4	2
6	4
8	Missing Number

Missing Number: _____ Rule: _____

Mercury

* Name _____

Week 14

** 1.

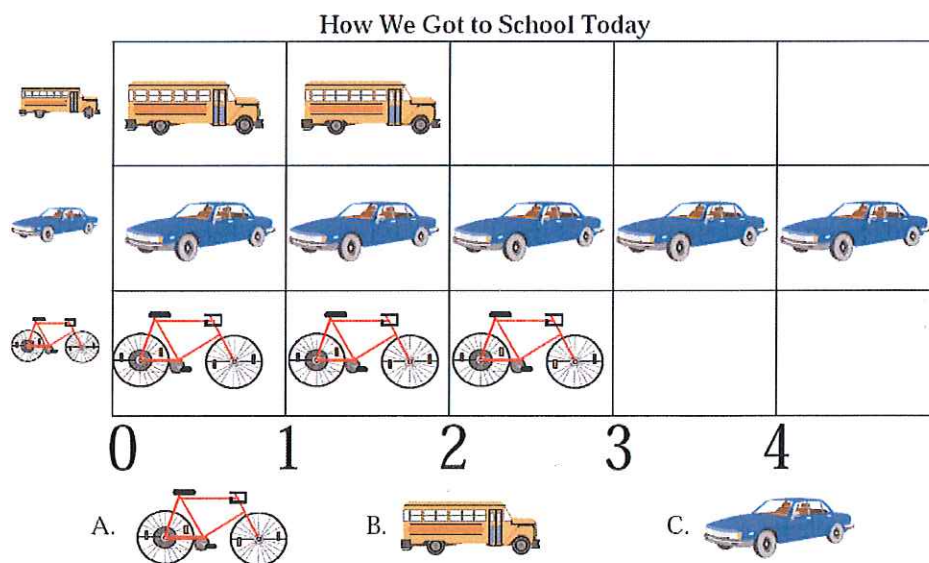
There are 4 ladybugs  in Molly's garden.

Then 3  more ladybugs come.

How many ladybugs are in the garden now?

* 2.

How did most of the children get to school?



**** 3. Children TV is planning to show wildlife films from 1 o'clock to 5 o'clock on Thursdays. If each film lasts half an hour, how many different wildlife films can it show? (Hint: Use a real clock)

*** 4.

What comes next? Write the next three numbers.

30, 40, 50, 60, _____, _____, _____,

** 5.

Judy has 1 quarter, 1 dime, and 1 nickel. She buys one 20¢ piece of candy. What coin does she use?

Mercury

* Name _____

Week 15

** 1.

Tom has 6 pennies

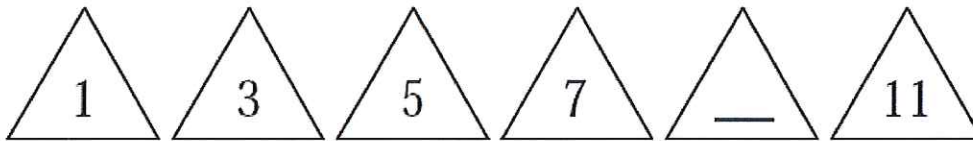


He spends 3 pennies on a candy.

How many pennies does he have now?

*** 2.

Find the missing number.



A. 7

B. 8

C. 9

** 3.



and



How can we show how many bugs in all?

A. $3 + 3 = \square$

B. $3 + 2 = \square$

C. $2 + 2 = \square$

**** 4. Circle all the even numbers in the following calendar.**

September

Sunday	Monday	Tuesday	Wednesday	Thursday	Friday	Saturday
	1	2	3	4	5	6
7	8	9	10	11	12	13
14	15	16	17	18	19	20
21	22	23	24	25	26	27
28	29	30				

****** 5.**

Look at following numbers and see if you can figure out what comes next to complete the pattern. Write a rule to find the next number.

7, 12, 17, 22, _____, _____